

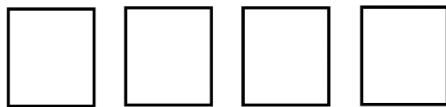
Averages and Range - www.m4ths.com – Steve Blades ©

(1) Find the mean, mode, median and range of each set of numbers below. If there is no mode, write 'no mode'

- (a) 4, 6, 8, 6, 10,
- (b) 3, 7, 8, 4, 5, 12, 14
- (c) 1, 0, 3, 8, 4, 2, 11

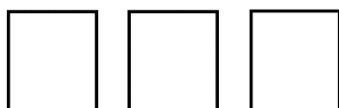
(2) Look at the numbers below.

5, 4, 8, 10, 3, 2, 7, 8



- (a) Use any 4 numbers from the list to give the 4 cards a mode.
- (b) Use any 4 number from the list to give the 4 cards a mean of 5.
- (c) Use any 4 number from the list to give the 4 cards a range of 6
- (d) Use any 4 number from the list to give the 4 cards a median of 4.5

(3) Using the 3 cards below:




- (a) Write 3 different numbers where the median is 6
- (b) Write any 3 numbers that have a mode of 7
- (c) Write 3 different numbers where the range of the numbers is 11
- (d) Write 3 different numbers where the mean is 5

(4) Using the 4 cards below:



- (a) Write any 4 DIFFERENT numbers that have a range of 10.
- (b) Write any 4 numbers where the mode is 8
- (c) Write down any 4 numbers that have a mean of 6
- (d) Write down 4 different numbers that have a median of 10
- (e) Write down any 4 numbers that have a range of 6 and a mean of 5.

(5) Using the 5 cards below



Find 5 different numbers that have a mean of 5, a range of 4, a median of 5 and no mode.

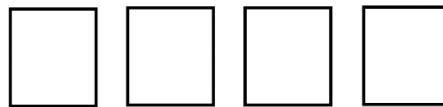
Averages and Range - www.m4ths.com – Steve Blades ©

(1) Find the mean, mode, median and range of each set of numbers below. If there is no mode, write 'no mode'

- (a) 4, 6, 8, 6, 10,
- (b) 3, 7, 8, 4, 5, 12, 14
- (c) 1, 0, 3, 8, 4, 2, 11

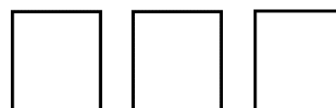
(2) Look at the numbers below.

5, 4, 8, 10, 3, 2, 7, 8



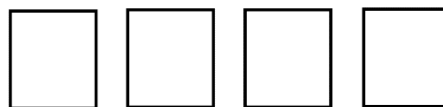
- (a) Use any 4 numbers from the list to give the 4 cards a mode.
- (b) Use any 4 number from the list to give the 4 cards a mean of 5.
- (c) Use any 4 number from the list to give the 4 cards a range of 6
- (d) Use any 4 number from the list to give the 4 cards a median of 4.5

(3) Using the 3 cards below:



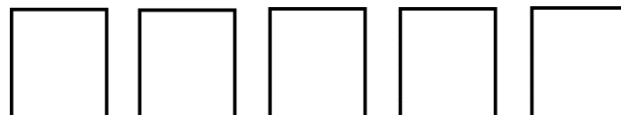
- (a) Write 3 different numbers where the median is 6
- (b) Write any 3 numbers that have a mode of 7
- (c) Write 3 different numbers where the range of the numbers is 11
- (d) Write 3 different numbers where the mean is 5

(4) Using the 4 cards below:



- (a) Write any 4 DIFFERENT numbers that have a range of 10.
- (b) Write any 4 numbers where the mode is 8
- (c) Write down any 4 numbers that have a mean of 6
- (d) Write down 4 different numbers that have a median of 10
- (e) Write down any 4 numbers that have a range of 6 and a mean of 5.

(5) Using the 5 cards below



Find 5 different numbers that have a mean of 5, a range of 4, a median of 5 and no mode.