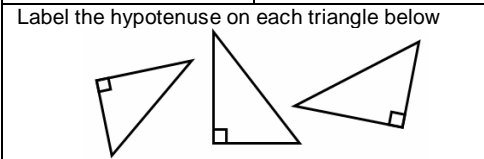


LO – Pythagoras Theorem 1 www.m4ths.com

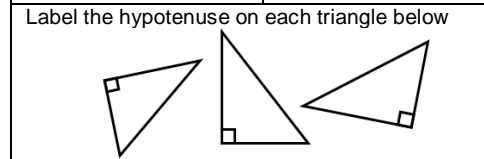
Find the following: $2^2 =$ $3^2 =$ $7^2 =$ $9^2 =$ $12^2 =$	Find the following: $\sqrt{25} =$ $\sqrt{16} =$ $\sqrt{30} =$ $\sqrt{50} =$ $\sqrt{73} =$
---	--



Find the length of the hypotenuse on each triangle below. Remember the units if the triangle has them! **They are not drawn to scale**

LO – Pythagoras Theorem www.m4ths.com

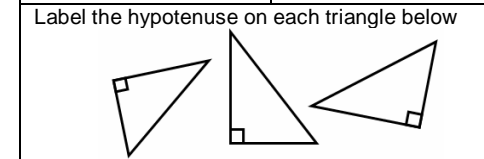
Find the following: $2^2 =$ $3^2 =$ $7^2 =$ $9^2 =$ $12^2 =$	Find the following: $\sqrt{25} =$ $\sqrt{16} =$ $\sqrt{30} =$ $\sqrt{50} =$ $\sqrt{73} =$
---	--



Find the length of the hypotenuse on each triangle below. Remember the units if the triangle has them! **They are not drawn to scale**

LO – Pythagoras Theorem www.m4ths.com

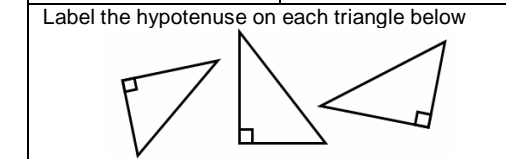
Find the following: $2^2 =$ $3^2 =$ $7^2 =$ $9^2 =$ $12^2 =$	Find the following: $\sqrt{25} =$ $\sqrt{16} =$ $\sqrt{30} =$ $\sqrt{50} =$ $\sqrt{73} =$
---	--



Find the length of the hypotenuse on each triangle below. Remember the units if the triangle has them! **They are not drawn to scale**

LO – Pythagoras Theorem 1 www.m4ths.com

Find the following: $2^2 =$ $3^2 =$ $7^2 =$ $9^2 =$ $12^2 =$	Find the following: $\sqrt{25} =$ $\sqrt{16} =$ $\sqrt{30} =$ $\sqrt{50} =$ $\sqrt{73} =$
---	--



Find the length of the hypotenuse on each triangle below. Remember the units if the triangle has them! **They are not drawn to scale**

