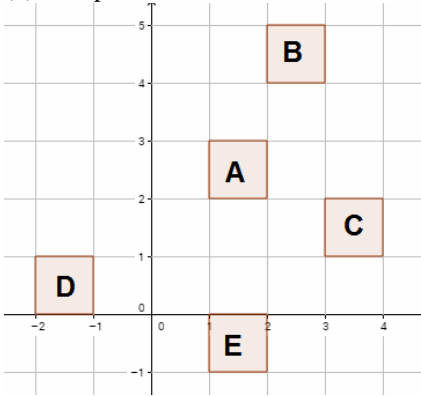


Naming Transformations (Translations)

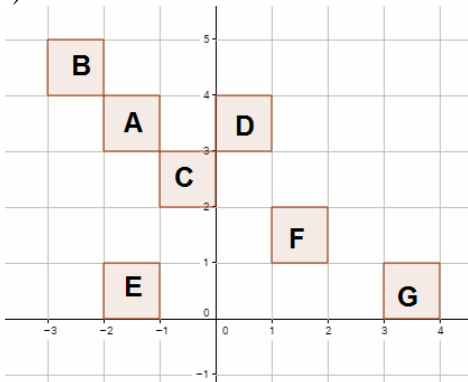
www.m4ths.com

(1) Complete each statement below:



- (a) A to B is a translation by the vector $\begin{pmatrix} \\ \end{pmatrix}$
- (b) A to C is a translation by the vector $\begin{pmatrix} \\ \end{pmatrix}$
- (c) A to D is a translation by the vector $\begin{pmatrix} \\ \end{pmatrix}$
- (d) A to E

(2)

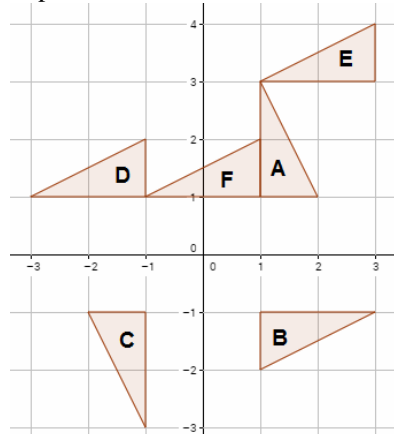


- (a) State **fully** the single transformation that maps: (i) A to B, (ii) B to A, (iii) A to C, (iv) C to B, (v) E to G, (vi) G to E, (vii) A to E, (viii) E to A, (ix) D to F, (x) A to F.
- (b) Draw the shape H such that the translation of A to H is $(-1, -2)$.

Naming Transformations (Rotations)

www.m4ths.com

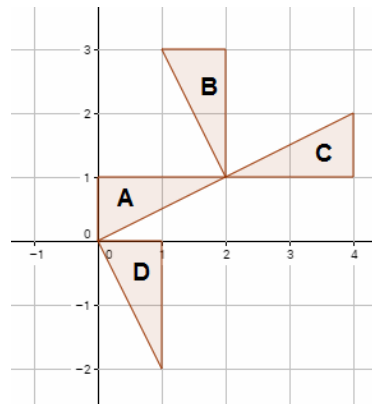
(1) Complete each statement below:



- (a) A to B is a rotation of $\underline{\hspace{1cm}}^\circ$, about the point $(,)$
- (b) A to C is a rotation of $\underline{\hspace{1cm}}^\circ$, about the point $(,)$
- (c) A to D is a rotation of $\underline{\hspace{1cm}}^\circ$, about the point $(,)$
- (d) A to E is a rotation of $\underline{\hspace{1cm}}^\circ$, about the point $(,)$
- (e) A to F is a rotation of $\underline{\hspace{1cm}}^\circ$, about the point $(,)$

(Please note: there can be more than one valid answer for each of the above)

(2)

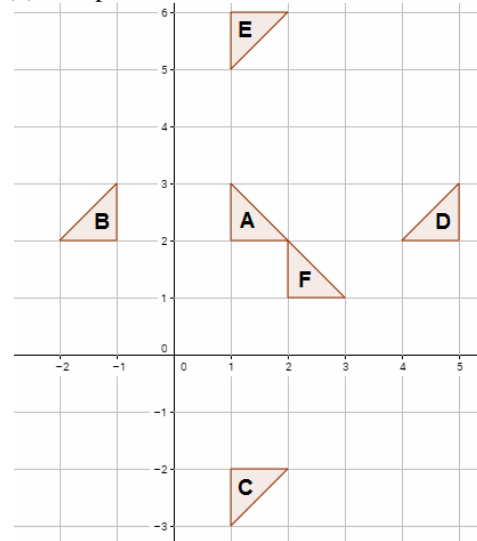


- State **fully** a single transformation that maps: (i) A to B, (ii) B to A, (iii) A to C, (iv) A to D, (v) D to A, (vi) C to B

Naming Transformations (Reflections)

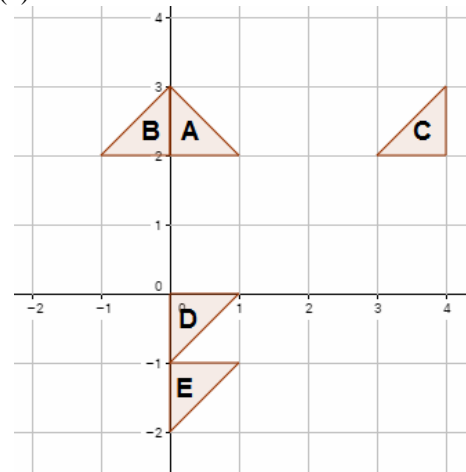
www.m4ths.com

(1) Complete each statement below:



- (a) B is a reflection of A in the $\underline{\hspace{1cm}}$ axis.
- (b) C is a reflection of A in the $\underline{\hspace{1cm}}$ axis.
- (c) D is a reflection of A in the line $x = \underline{\hspace{1cm}}$
- (d) E is a reflection of A in the line $y = \underline{\hspace{1cm}}$
- (e) F is a reflection of A in the line $y = \underline{\hspace{1cm}}$

(2)

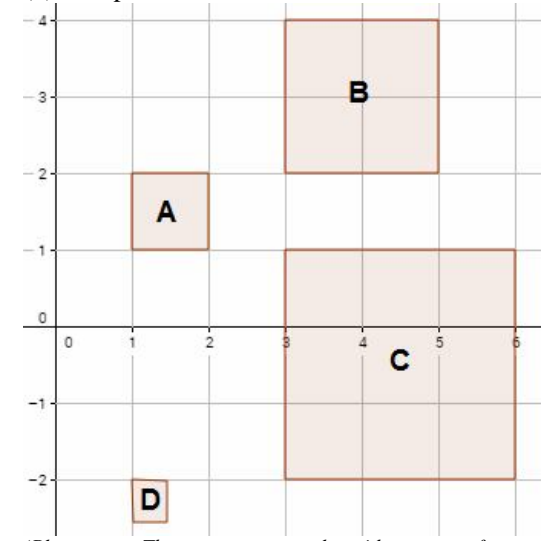


- State **fully** the single transformation that maps (i) A to B, (ii) A to C, (iii) A to D, (iv) A to E, (v) E to D (it's not a reflection!!!).

Naming Transformations (Enlargements)

www.m4ths.com

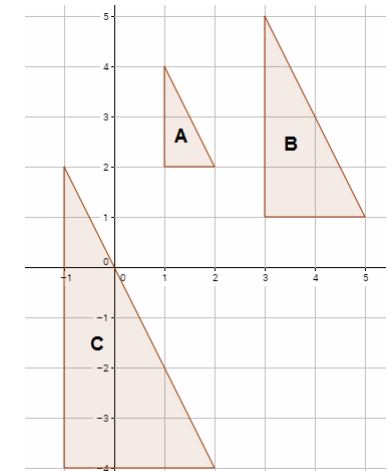
(1) Complete each statement below:



*(Please note: These are **not** examples with a centre of enlargement)*

- (a) A to B is an enlargement with scale factor $\underline{\hspace{1cm}}$
- (a) A to C is an enlargement with scale factor $\underline{\hspace{1cm}}$
- (a) A to D is an enlargement with scale factor $\underline{\hspace{1cm}}$
- (a) B to A is an enlargement with scale factor $\underline{\hspace{1cm}}$
- (a) C to A is an enlargement with scale factor $\underline{\hspace{1cm}}$

(2)



- State **fully** the single transformation that maps (i) A to B, (ii) A to C, (iii) B to A (iv) B to C