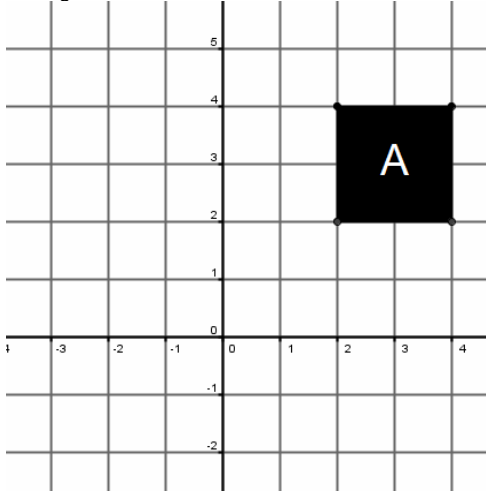
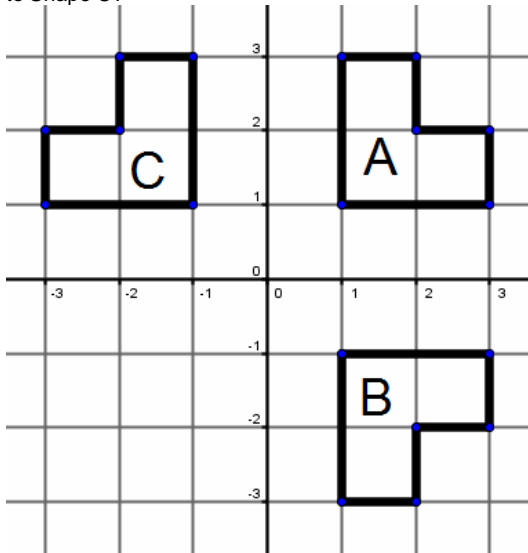


**GCSE Reflections**

**Task (1)** Copy shape A on a set of axis in your book and reflect it in the lines:  
 (B)  $x = 0$  (C)  $y = 1$  (D)  $y = 0$   
 (E)  $x = 1$  (F)  $y = -1$  and label each one with the letter given.



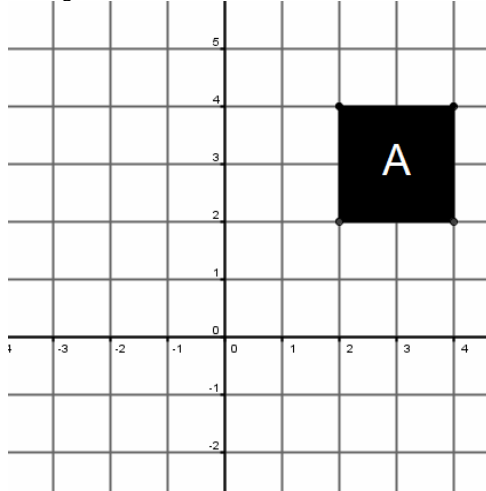
**Task (2)** Describe fully the single transformation that takes (i) Shape A to Shape B and (ii) Shape A to Shape C.  
*Extension:* Is there a reflection that takes Shape B to Shape C?



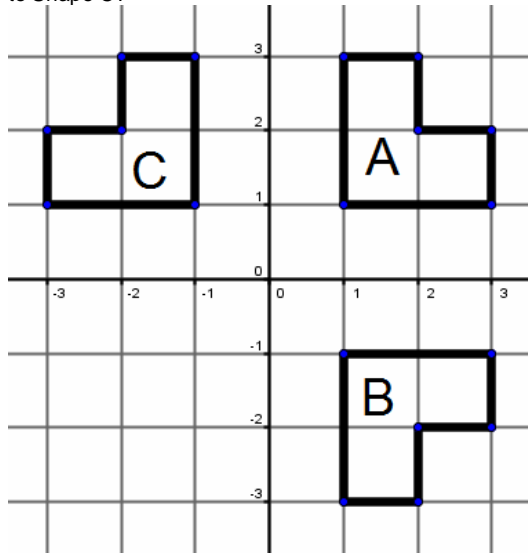
**Task (3)** On a set of axis Plot the points (1,1), (1,3), (2,3) & (2,1). Label the shape A. Reflect shape A in the x axis and label it B. Reflect shape B in the y axis and label it C.

**GCSE Reflections**

**Task (1)** Copy shape A on a set of axis in your book and reflect it in the lines:  
 (B)  $x = 0$  (C)  $y = 1$  (D)  $y = 0$   
 (E)  $x = 1$  (F)  $y = -1$  and label each one with the letter given.



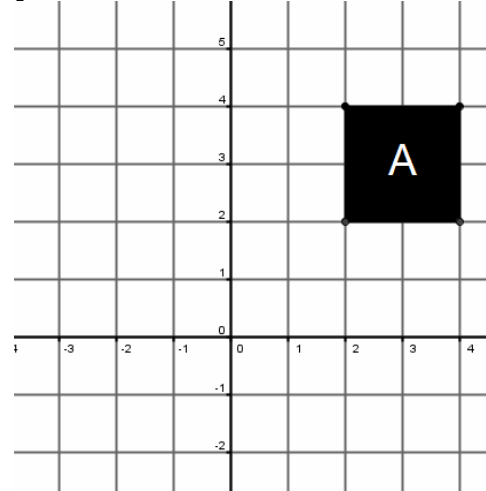
**Task (2)** Describe fully the single transformation that takes (i) Shape A to Shape B and (ii) Shape A to Shape C.  
*Extension:* Is there a reflection that takes Shape B to Shape C?



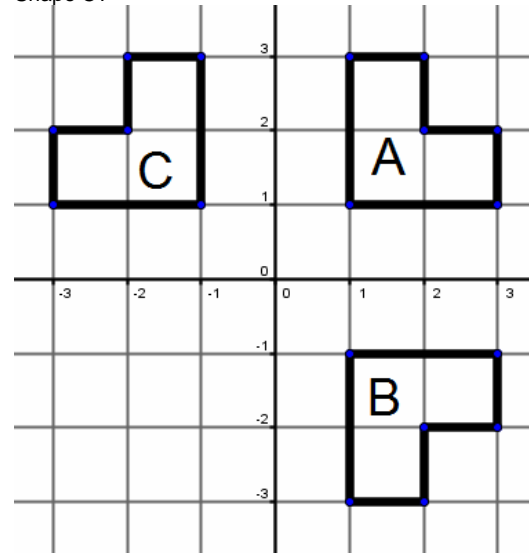
**Task (3)** On a set of axis Plot the points (1,1), (1,3), (2,3) & (2,1). Label the shape A. Reflect shape A in the x axis and label it B. Reflect shape B in the y axis and label it C.

**GCSE Reflections**

**Task (1)** Copy shape A on a set of axis in your book and reflect it in the lines:  
 (B)  $x = 0$  (C)  $y = 1$  (D)  $y = 0$   
 (E)  $x = 1$  (F)  $y = -1$  and label each one with the letter given.



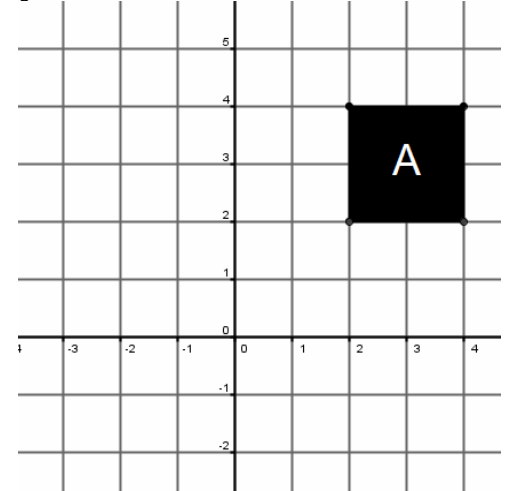
**Task (2)** Describe fully the single transformation that takes (i) Shape A to Shape B and (ii) Shape A to Shape C.  
*Extension:* Is there a reflection that takes Shape B to Shape C?



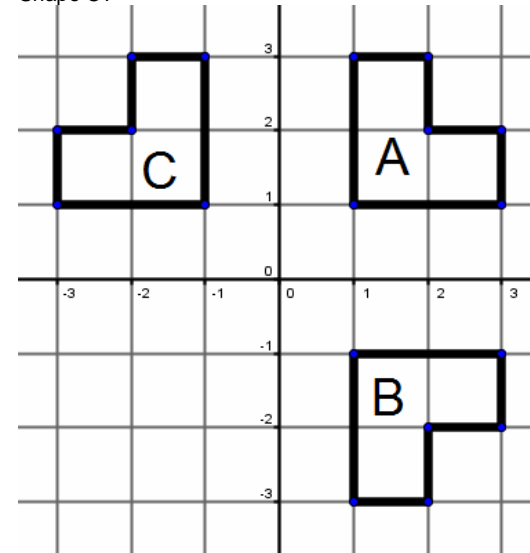
**Task (3)** On a set of axis Plot the points (1,1), (1,3), (2,3) & (2,1). Label the shape A. Reflect shape A in the x axis and label it B. Reflect shape B in the y axis and label it C.

**GCSE Reflections**

**Task (1)** Copy shape A on a set of axis in your book and reflect it in the lines:  
 (B)  $x = 0$  (C)  $y = 1$  (D)  $y = 0$   
 (E)  $x = 1$  (F)  $y = -1$  and label each one with the letter given.



**Task (2)** Describe fully the single transformation that takes (i) Shape A to Shape B and (ii) Shape A to Shape C.  
*Extension:* Is there a reflection that takes Shape B to Shape C?



**Task (3)** On a set of axis Plot the points (1,1), (1,3), (2,3) & (2,1). Label the shape A. Reflect shape A in the x axis and label it B. Reflect shape B in the y axis and label it C.