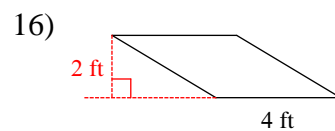
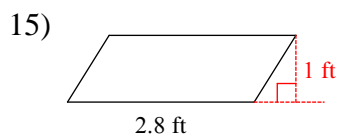
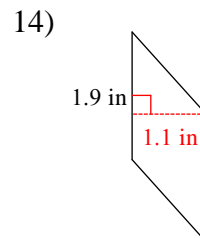
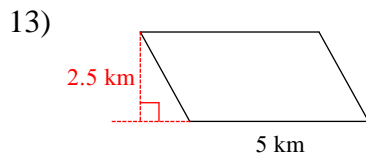
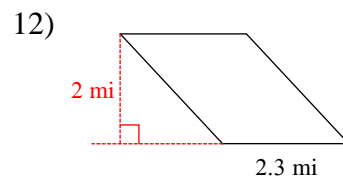
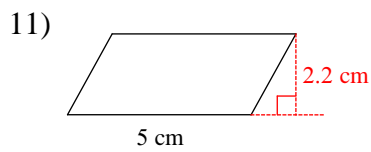
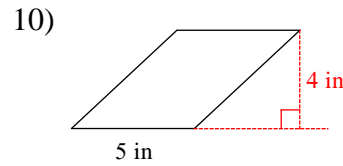
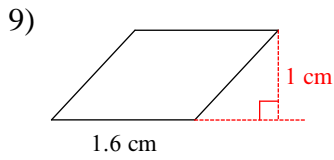
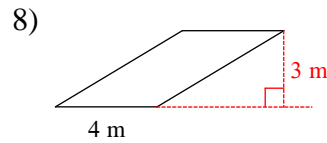
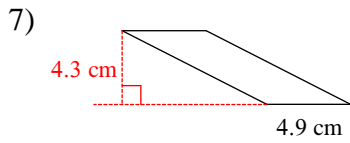
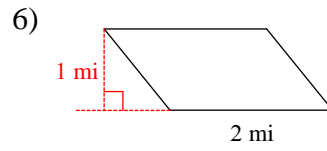
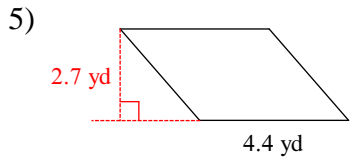
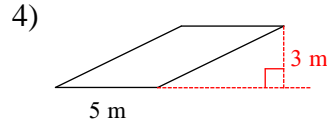
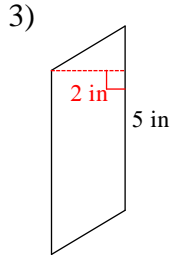
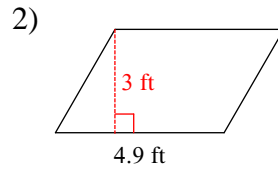
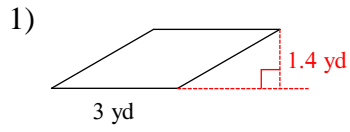
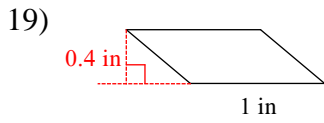
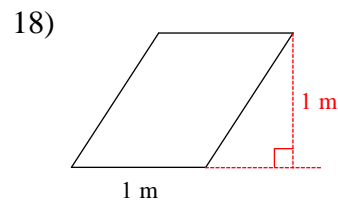
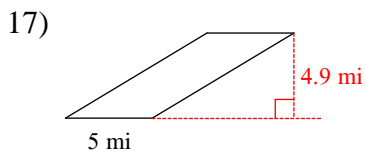


Steve Blades Worksheet

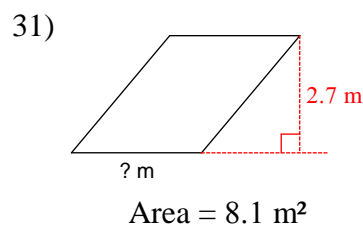
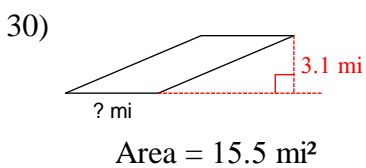
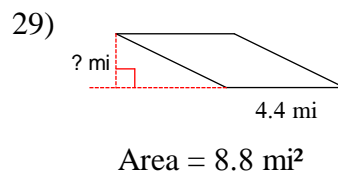
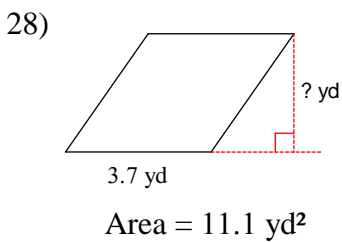
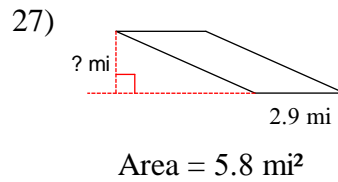
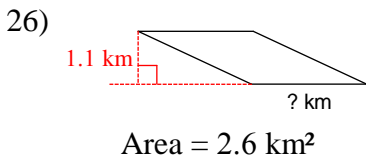
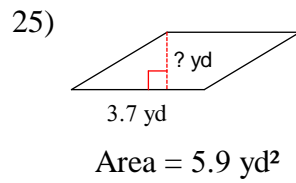
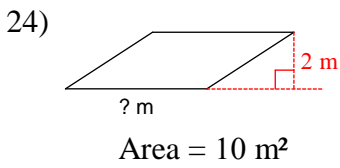
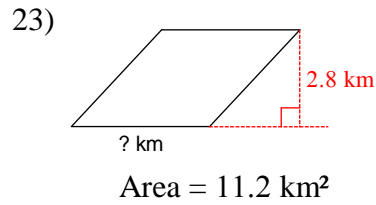
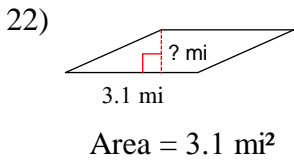
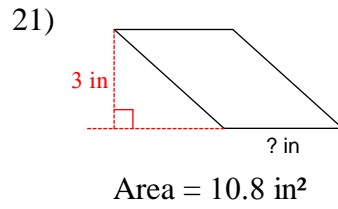
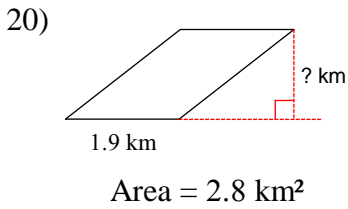
© 2010 Kuta Software LLC. All rights reserved.

Find the area of each.

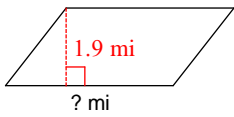




Find the missing measurement. Round your answer to the nearest tenth.

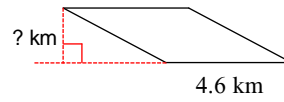


32)



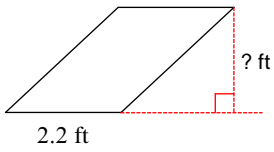
$$\text{Area} = 7.8 \text{ mi}^2$$

33)



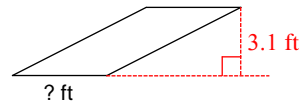
$$\text{Area} = 9.2 \text{ km}^2$$

34)



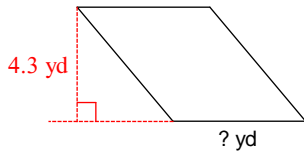
$$\text{Area} = 4.4 \text{ ft}^2$$

35)



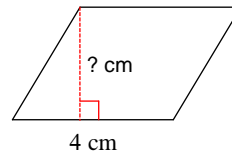
$$\text{Area} = 13.3 \text{ ft}^2$$

36)



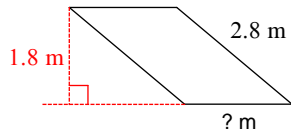
$$\text{Area} = 21.5 \text{ yd}^2$$

37)



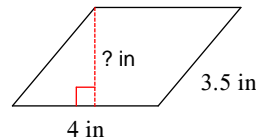
$$\text{Area} = 11.2 \text{ cm}^2$$

38)



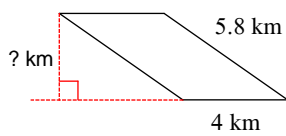
$$\text{Area} = 3.6 \text{ m}^2$$

39)



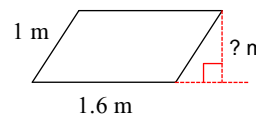
$$\text{Area} = 10.8 \text{ in}^2$$

40)



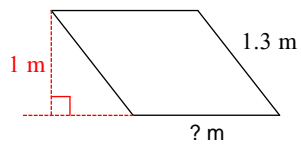
$$\text{Area} = 13.2 \text{ km}^2$$

41)



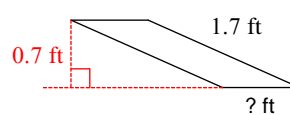
$$\text{Area} = 1.3 \text{ m}^2$$

42)



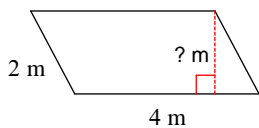
$$\text{Area} = 1.4 \text{ m}^2$$

43)



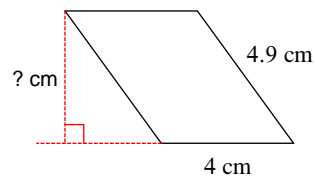
$$\text{Area} = 0.6 \text{ ft}^2$$

44)

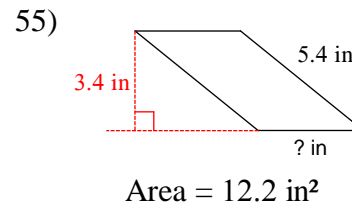
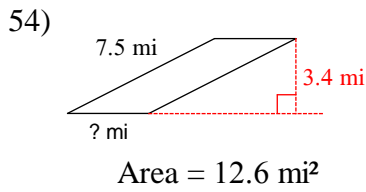
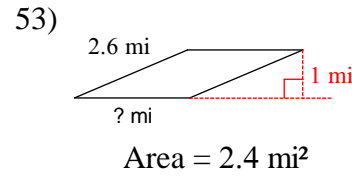
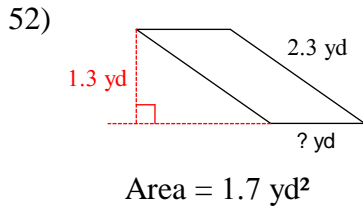
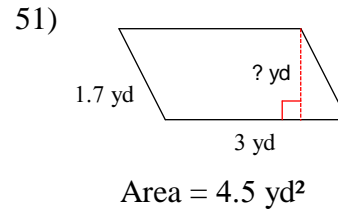
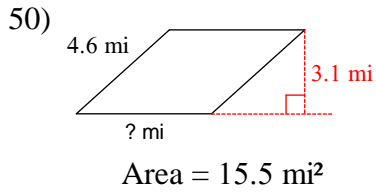
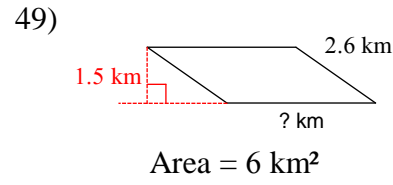
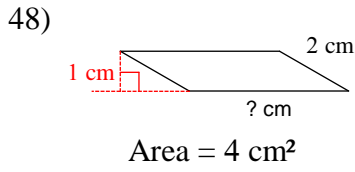
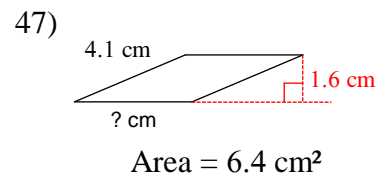
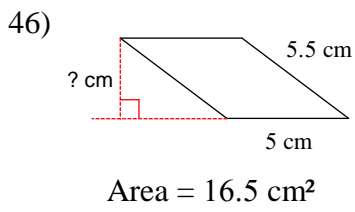


$$\text{Area} = 7.2 \text{ m}^2$$

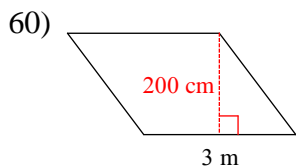
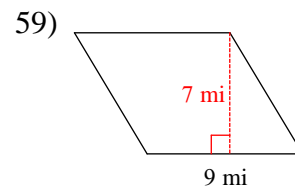
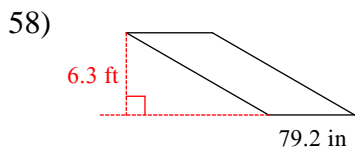
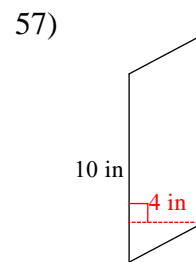
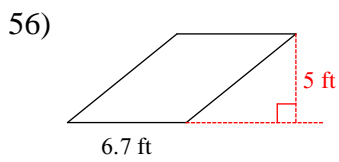
45)



$$\text{Area} = 16 \text{ cm}^2$$



Find the area of each.



Answers to Steve Blades Worksheet

- | | | | |
|--------------------------|---------------------------|--------------------------|--------------------------|
| 1) 4.2 yd ² | 2) 14.7 ft ² | 3) 10 in ² | 4) 15 m ² |
| 5) 11.88 yd ² | 6) 2 mi ² | 7) 21.07 cm ² | 8) 12 m ² |
| 9) 1.6 cm ² | 10) 20 in ² | 11) 11 cm ² | 12) 4.6 mi ² |
| 13) 12.5 km ² | 14) 2.09 in ² | 15) 2.8 ft ² | 16) 8 ft ² |
| 17) 24.5 mi ² | 18) 1 m ² | 19) 0.4 in ² | 20) 1.5 km |
| 21) 3.6 in | 22) 1 mi | 23) 4 km | 24) 5 m |
| 25) 1.6 yd | 26) 2.4 km | 27) 2 mi | 28) 3 yd |
| 29) 2 mi | 30) 5 mi | 31) 3 m | 32) 4.1 mi |
| 33) 2 km | 34) 2 ft | 35) 4.3 ft | 36) 5 yd |
| 37) 2.8 cm | 38) 2 m | 39) 2.7 in | 40) 3.3 km |
| 41) 0.8 m | 42) 1.4 m | 43) 0.9 ft | 44) 1.8 m |
| 45) 4 cm | 46) 3.3 cm | 47) 4 cm | 48) 4 cm |
| 49) 4 km | 50) 5 mi | 51) 1.5 yd | 52) 1.3 yd |
| 53) 2.4 mi | 54) 3.7 mi | 55) 3.6 in | 56) 33.5 ft ² |
| 57) 40 in ² | 58) 41.58 ft ² | 59) 63 mi ² | 60) 6 m ² |