

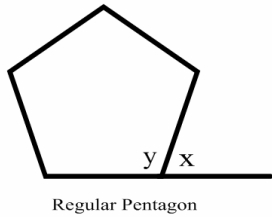
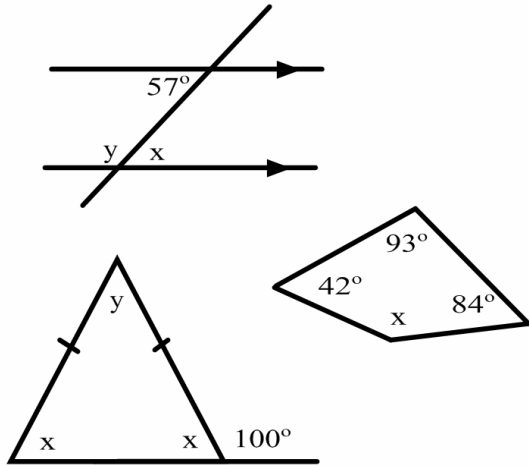
Angles Overview

Task 1

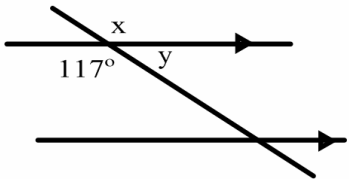
Complete the following sentence:
The sum of the interior angles of a triangle = _____ degrees and the sum of the interior angles of a quadrilateral = _____ degrees.

Task 2

Find the value of x and y for the following questions



Regular Pentagon



Task 3

Find the size of the interior and exterior angles of the following regular shapes

- (i) Hexagon
- (ii) Rectangle
- (iii) Octagon

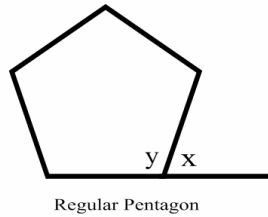
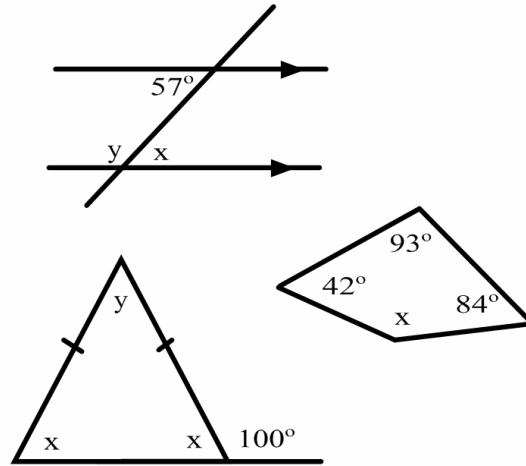
Angles Overview

Task 1

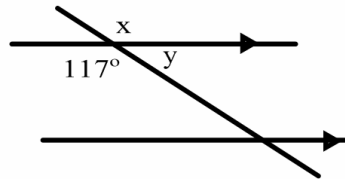
Complete the following sentence:
The sum of the interior angles of a triangle = _____ degrees and the sum of the interior angles of a quadrilateral = _____ degrees.

Task 2

Find the value of x and y for the following questions



Regular Pentagon



Task 3

Find the size of the interior and exterior angles of the following regular shapes

- (i) Hexagon
- (ii) Rectangle
- (iii) Octagon

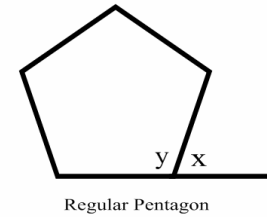
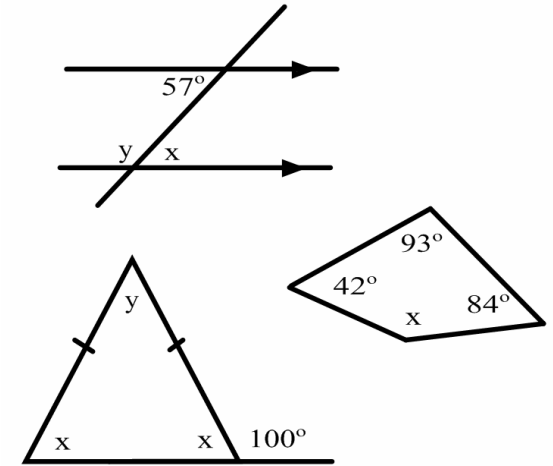
Angles Overview

Task 1

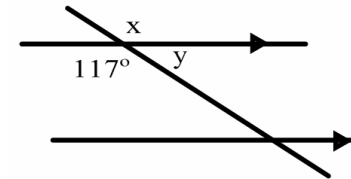
Complete the following sentence:
The sum of the interior angles of a triangle = _____ degrees and the sum of the interior angles of a quadrilateral = _____ degrees.

Task 2

Find the value of x and y for the following questions



Regular Pentagon



Task 3

Find the size of the interior and exterior angles of the following regular shapes

- (i) Hexagon
- (ii) Rectangle
- (iii) Octagon