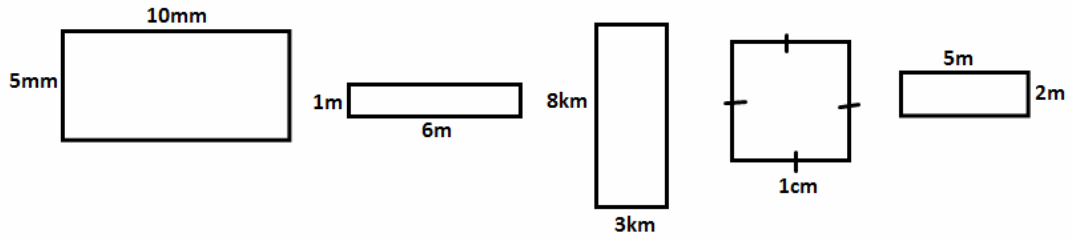
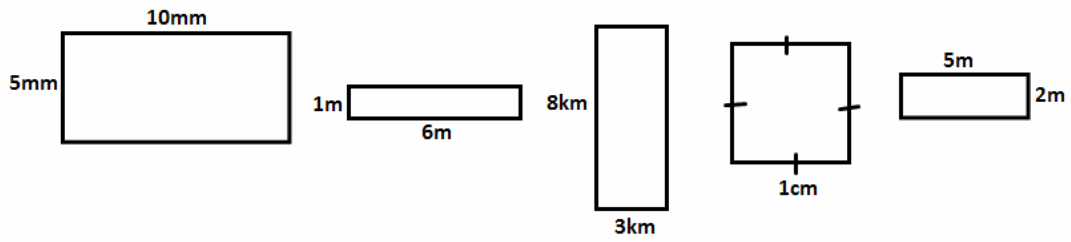


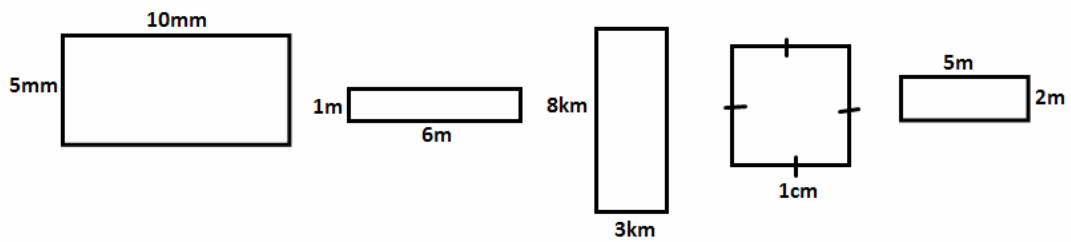
Find (i) The area and (ii) The perimeter of the shapes below. (make sure you put units on and show workings!)



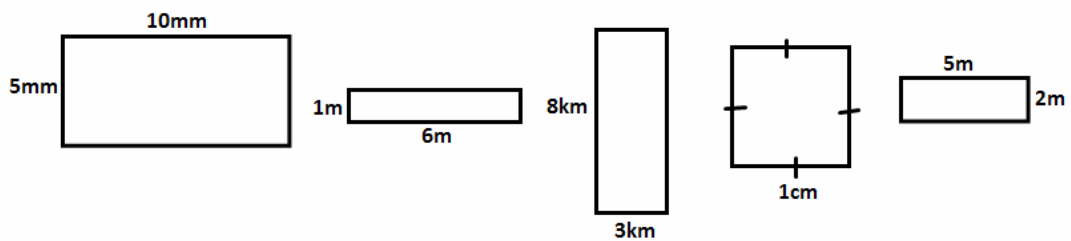
Find (i) The area and (ii) The perimeter of the shapes below. (make sure you put units on and show workings!)



Find (i) The area and (ii) The perimeter of the shapes below. (make sure you put units on and show workings!)



Find (i) The area and (ii) The perimeter of the shapes below. (make sure you put units on and show workings!)



Find (i) The area and (ii) The perimeter of the shapes below. (make sure you put units on and show workings!)

