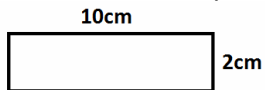


(2) Area and Perimeter of 2D shapes

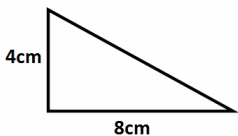
If the dimensions of a shape are measured in cm then the area is measured in _____ and the perimeter is measured in _____

Find the area and perimeter of the shape below (giving your answer in the correct units)

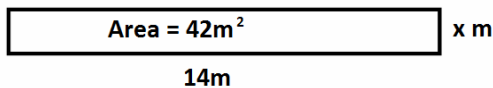


To find the area of a triangle you.....

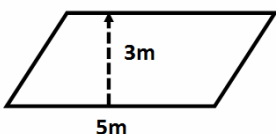
Find the area of the triangle below



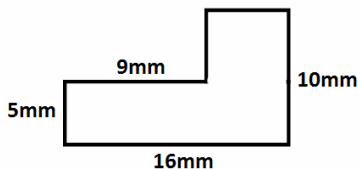
Find (a) the value of x and (b) The perimeter of the shape.



(a) Name the shape below and (b) Find the area of the shape.



Find the area and perimeter of the shape below



Bob knows his garden has an area of 56m² and one of the lengths is 7m but can't remember the other. Given that the shape of the garden is a rectangle, find the missing length

State the dimensions of **any** triangle that has an area of 24cm²

A piece of paper is 9" by 8". It's cut into 12 equal pieces. Find the area of each piece.

Find the area and perimeter of the rectangle below in terms of p and q

