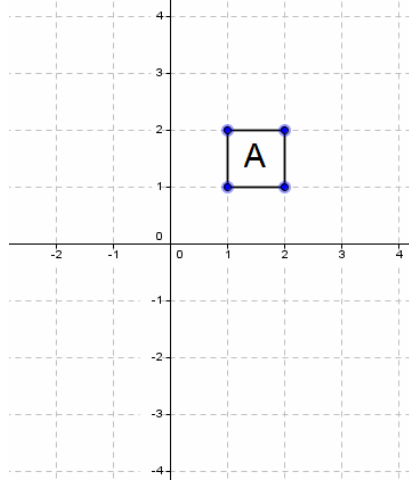
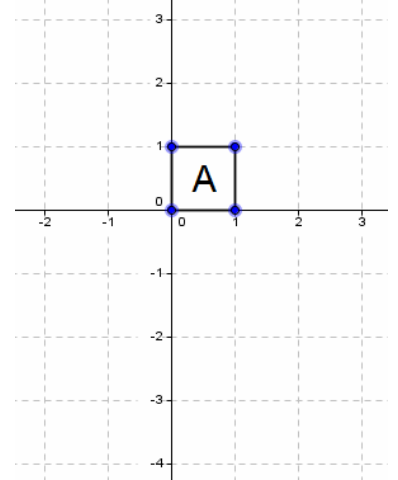


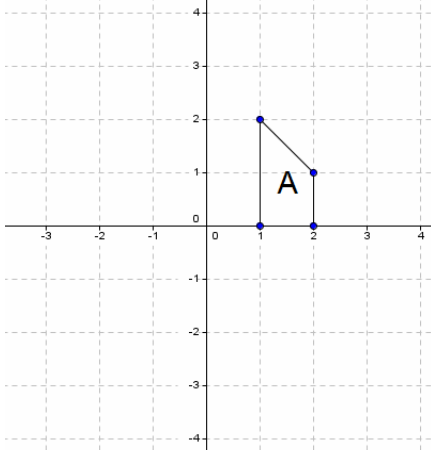
Plot and label the points A (-1,3), B(1,0), C(0,3), D(-2,-2), E(3,-1), F(-2,2) and G(0,-3)



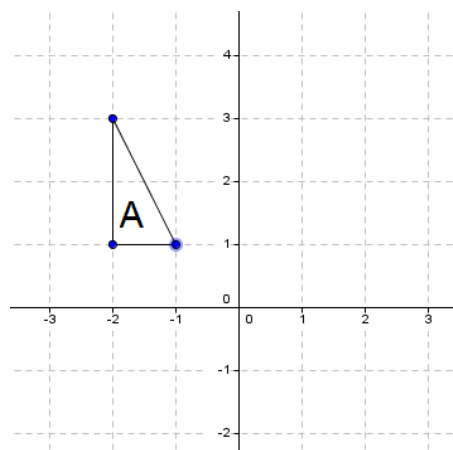
Rotate shape A 180° clockwise about (1,0) Label the shape B
Translate shape A (2,1) Label the shape C



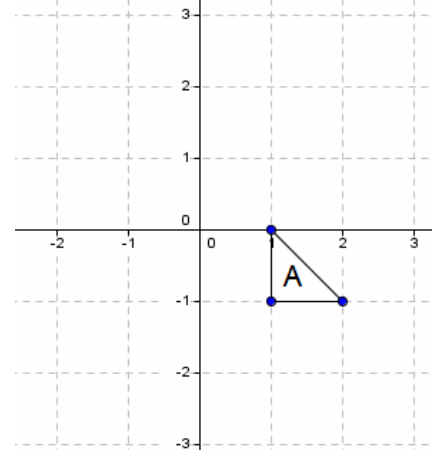
Rotate shape A 90° clockwise about (-1,-1) Label the shape B
Translate shape A (-1,-3) Label the shape C



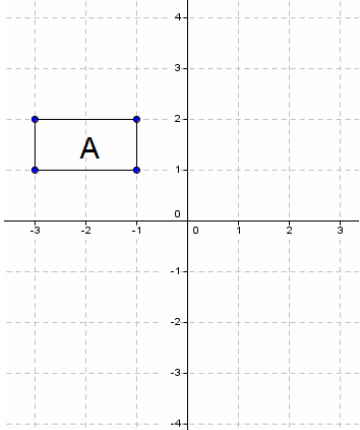
Rotate shape A 90° anticlockwise about (1,-1) Label the shape B
Translate shape A (0,-3) Label the shape C



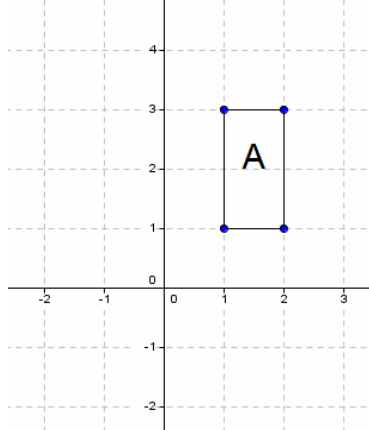
Rotate shape A 270° clockwise about (0,0) Label the shape B
Translate shape A (-1,0) Label the shape C



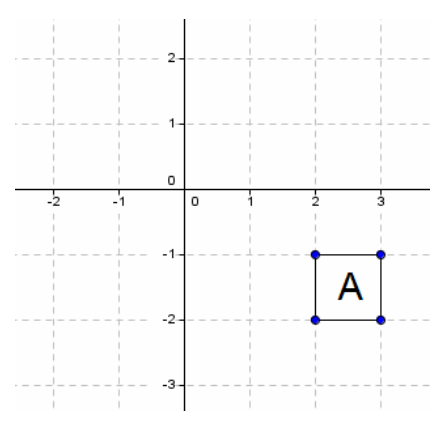
Rotate shape A 90° clockwise about (1,1) Label the shape B
Translate shape A (1,3) Label the shape C



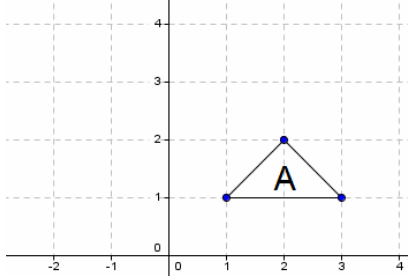
Rotate shape A 180° clockwise about (0,-) Label the shape B
Translate shape A (1,-3) Label the shape C



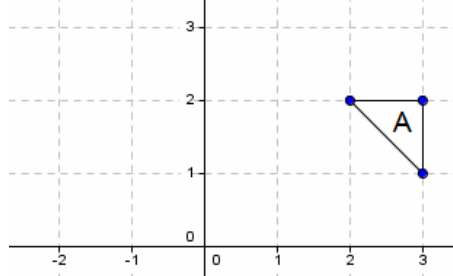
Rotate shape A 180° anticlockwise about (1,1) Label the shape B
Translate shape A (-3,1) Label the shape C



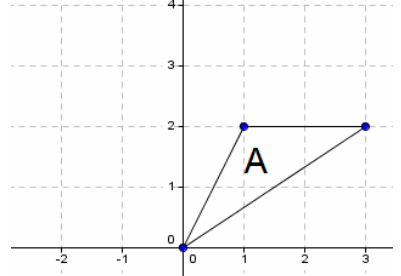
Rotate shape A 180° anticlockwise about (2,0) Label the shape B
Translate shape A (-4,3) Label the shape C



Rotate shape A 90° anticlockwise about (2,0) Label the shape B
Translate shape A (-3,2) Label the shape C



Rotate shape A 180° clockwise about (2,2) Label the shape B
Translate shape A (-4,1) Label the shape C



Rotate shape A 90° anticlockwise about (1,0) Label the shape B
Translate shape A (-2,1) Label the shape C